



Please write clearly in block capitals.

Centre number

--	--	--	--	--

Candidate number

--	--	--	--

Surname

---

Forename(s)

---

Candidate signature

---

I declare this is my own work.

# AS COMPUTER SCIENCE

## Paper 2

Tuesday 21 May 2024

Afternoon

Time allowed: 1 hour 30 minutes

### Materials

For this paper you must have:

- a calculator.

### Instructions

- Use black ink or black ball-point pen.
- Fill in the boxes at the top of this page.
- Answer **all** questions.
- You must answer the questions in the spaces provided. Do not write outside the box around each page or on blank pages.
- If you need extra space for your answer(s), use the lined pages at the end of this book. Write the question number against your answer(s).
- Do all rough work in this book. Cross through any work you do not want to be marked.

### Information

- The marks for questions are shown in brackets.
- The maximum mark for this paper is 75.

### Advice

- In some questions you are required to indicate your answer by completely shading a lozenge alongside the appropriate answer as shown.
- If you want to change your answer you must cross out your original answer as shown.
- If you wish to return to an answer previously crossed out, ring the answer you now wish to select as shown.

For Examiner's Use	
Question	Mark
1	
2	
3	
4	
5	
6	
7	
8	
9	
10	
11	
<b>TOTAL</b>	



J U N 2 4 7 5 1 6 2 0 1

IB/G/Jun24/G4001/E11

**7516/2**

Answer **all** questions in the spaces provided.

Do not write  
outside the  
box

0 1 . 1

Describe the set of real numbers.

[1 mark]

---



---



---

0 1 . 2

The number 5 can be written as  $\frac{15}{3}$

Shade **two** lozenges to indicate which of the following statements are true.

[2 marks]

<b>A</b>	15 and 3 are <b>not</b> integers	<input type="checkbox"/>
<b>B</b>	15 and 3 are irrational numbers	<input type="checkbox"/>
<b>C</b>	5 is an irrational number	<input type="checkbox"/>
<b>D</b>	5 is a natural number	<input type="checkbox"/>
<b>E</b>	5 is a rational number	<input type="checkbox"/>

0 1 . 3

Shade **one** lozenge to indicate which of the symbols below represents the set of rational numbers.

[1 mark]

<b>A</b>	$\mathbb{C}$	<input type="checkbox"/>
<b>B</b>	$\mathbb{N}$	<input type="checkbox"/>
<b>C</b>	$\mathbb{Q}$	<input type="checkbox"/>
<b>D</b>	$\mathbb{R}$	<input type="checkbox"/>
<b>E</b>	$\mathbb{Z}$	<input type="checkbox"/>

4



Do not write  
outside the  
box

0 2 . 1

Convert the bit pattern 10001010 to hexadecimal.

[1 mark]

---



---



---

0 2 . 2

Represent the decimal number 139 as an **8-bit unsigned binary integer**.

[1 mark]

---



---



---

0 2 . 3

Show how the **unsigned binary number** 00100011 can be added to the **unsigned binary number** 00101011 without converting the numbers into decimal.You **must** show all your working in binary.

[2 marks]

$$\begin{array}{r} 0\ 0\ 1\ 0\ 0\ 0\ 1\ 1 \\ +\ 0\ 0\ 1\ 0\ 1\ 0\ 1\ 1 \\ \hline \end{array}$$


---



---

Question 2 continues on the next page

Turn over ►



0 2 . 4

Show how the **8-bit two's complement binary integer** 00011100 can be subtracted from the **8-bit two's complement binary integer** 00111011 without converting the numbers to decimal.

You **must** show all your working in binary.

[2 marks]

---



---



---



---



---



---

0 2 . 5

The bit pattern in **Figure 1** represents a **10-bit unsigned fixed point binary number** with four bits before and six bits after the binary point.

Figure 1

0	1	1	1	●	0	1	0	1	1	0
---	---	---	---	---	---	---	---	---	---	---

Convert the bit pattern in **Figure 1** to decimal.

[2 marks]

---



---



---



---

8



**0 3 . 1**

State the name of the component on a sound card that transforms the continuous signal received from a microphone to a form that can be stored by a computer.

**[1 mark]**

---

---

---

**0 3 . 2**

A bitmap image is 52 pixels in height and 26 pixels in width. The bitmap representation of the image requires 845 bytes.

Calculate the maximum number of colours that could be used in the bitmap image.

You should show all your working.

**[2 marks]**

---

---

---

---

---

---

**0 3 . 3**

When a bitmap image is stored in a file, additional information is stored as well as the colours of the pixels. For example, the bitmap file might contain information on the date of creation, image width and height.

State the name given to this additional information when storing a bitmap image.

**[1 mark]**

---

---

---

**Question 3 continues on the next page**

**Turn over ►**

**0 3 . 4**

A sound is recorded with a sample rate of 96 000 Hz and a sample resolution of 24 bits. The file size of the recording is 12 096 kilobytes.

A sample rate of 1 Hz means that one sample has been taken every second.

Calculate the duration of the sound recording.

You should show all your working.

**[3 marks]**

---

---

---

---

---

---

---

---

---

---

**0 3 . 5**

A sample resolution of 16 bits is commonly used in audio recordings.

Explain why increasing the sample resolution from 16 bits to 24 bits can improve the quality of an audio recording.

**[1 mark]**

---

---

---



Do not write  
outside the  
box

**0 3 . 6** MIDI does not use sampling to represent music.

Describe how music is represented using MIDI.

**[2 marks]**

---

---

---

---

---

---

**0 3 . 7** Explain **one** advantage of using MIDI instead of sampled sound to represent music.

**[1 mark]**

---

---

---

11

**Turn over for the next question**

**Turn over ►**



0 4 . 1

A message is encrypted using a Caesar cipher that operates with a shift value of four. For example, the letter A in plaintext would be represented by E in ciphertext.

The ciphertext for the message is WSSDI.

What is the plaintext for the message?

[1 mark]

---

---

---

0 4 . 2

Explain **two** reasons why Caesar ciphers are vulnerable to being cracked.

[2 marks]

---

---

---

---

---

---

3





0 5 . 1

Shade **one** lozenge to indicate which of the following is an example of system software.

[1 mark]

<b>A</b>	Computer game	<input type="radio"/>
<b>B</b>	Image editor	<input type="radio"/>
<b>C</b>	Programming language translator	<input type="radio"/>
<b>D</b>	Video conferencing software	<input type="radio"/>
<b>E</b>	Word processor	<input type="radio"/>

0 5 . 2

An operating system manages hardware resources, for example the I/O devices associated with a computer system.

State **two** other examples of hardware resources that an operating system is responsible for managing.

[2 marks]

---



---



---



---



---



---



---

3

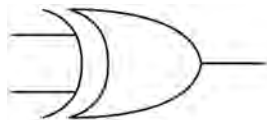
Turn over for the next question

Turn over ►



**0 6 . 1** Figure 2 shows the symbol for a logic gate.

**Figure 2**

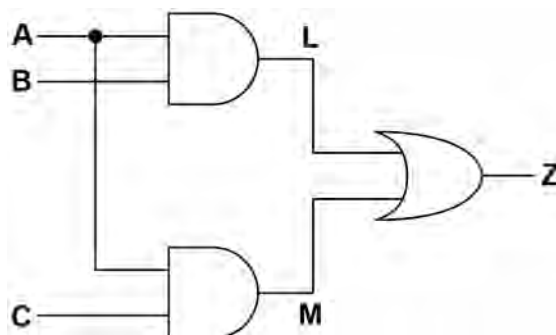


State the name of the logic gate shown in **Figure 2**.

**[1 mark]**

**0 6 . 2** Figure 3 shows a logic circuit.

**Figure 3**



Complete the truth table for the logic circuit in **Figure 3**.

**[2 marks]**

A	B	C	L	M	Z
0	0	0			
0	0	1			
0	1	0			
0	1	1			
1	0	0			
1	0	1			
1	1	0			
1	1	1			

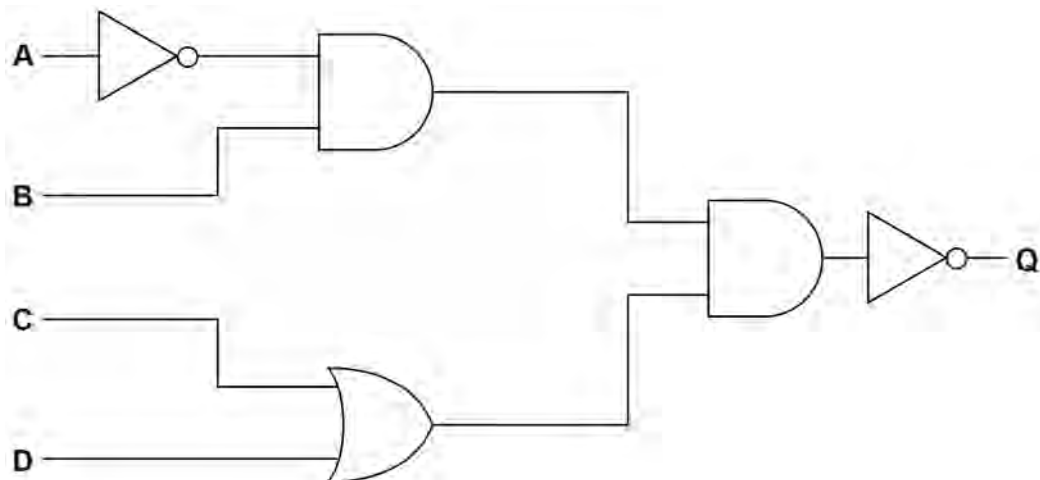


0 6 . 3

Figure 4 shows a logic circuit.

Do not write  
outside the  
box

Figure 4

Write a Boolean expression for **Q**.**[3 marks]**

---

---

---

Question 6 continues on the next page

Turn over ►



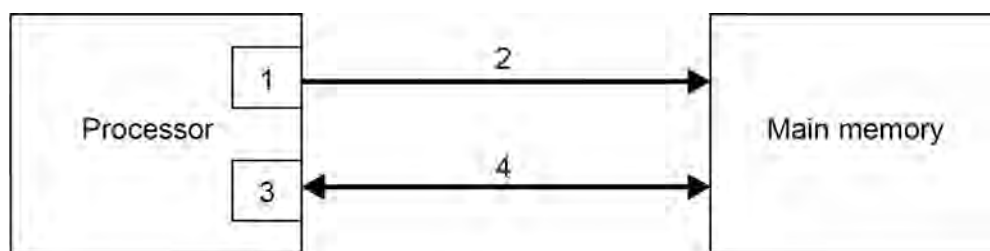


07.1

**Figure 5** shows some of the processor registers and buses that are used during the fetch stage of the fetch-execute cycle, together with the main memory.

Do not write  
outside the  
box

**Figure 5**



State the name of the components that are labelled in **Figure 5** with the numbers 1 to 4. In the case of register names, the full names **must** be stated.

**[2 marks]**

1	
2	
3	
4	

07.2

Describe the stored program concept.

**[2 marks]**

---



---



---



---



---



---

**Question 7 continues on the next page**

**Turn over ►**



07.3

In a particular processor instruction set, each instruction consists of an opcode and an operand. An operand could be an immediate value to be used by a program.

State **two** other types of value that can be stored in an operand.

[2 marks]

---



---



---

07.4

Computer A and Computer B both have a processor with a clock speed of 2.8 GHz but Computer A performs tasks much faster than Computer B. Computer A has a larger cache and greater word length than Computer B.

Explain why the larger cache and greater word length are possible factors for the performance difference between Computer A and Computer B.

[2 marks]

Larger cache \_\_\_\_\_

---



---

Greater word length \_\_\_\_\_

---



---

8



**Turn over for the next question**

*Do not write  
outside the  
box*

**DO NOT WRITE ON THIS PAGE  
ANSWER IN THE SPACES PROVIDED**

**Turn over ►**



**Table 1** shows the standard AQA assembly language instruction set that should be used to answer question **0 8**

Do not write  
outside the  
box

**Table 1 – standard AQA assembly language instruction set**

LDR Rd, <memory ref>	Load the value stored in the memory location specified by <memory ref> into register d.
STR Rd, <memory ref>	Store the value that is in register d into the memory location specified by <memory ref>.
ADD Rd, Rn, <operand2>	Add the value specified in <operand2> to the value in register n and store the result in register d.
SUB Rd, Rn, <operand2>	Subtract the value specified by <operand2> from the value in register n and store the result in register d.
MOV Rd, <operand2>	Copy the value specified by <operand2> into register d.
CMP Rn, <operand2>	Compare the value stored in register n with the value specified by <operand2>.
B <label>	Always branch to the instruction at position <label> in the program.
B<condition> <label>	Branch to the instruction at position <label> if the last comparison met the criterion specified by <condition>. Possible values for <condition> and their meanings are: EQ: equal to                      NE: not equal to GT: greater than                LT: less than
AND Rd, Rn, <operand2>	Perform a bitwise logical AND operation between the value in register n and the value specified by <operand2> and store the result in register d.
ORR Rd, Rn, <operand2>	Perform a bitwise logical OR operation between the value in register n and the value specified by <operand2> and store the result in register d.
EOR Rd, Rn, <operand2>	Perform a bitwise logical XOR (exclusive or) operation between the value in register n and the value specified by <operand2> and store the result in register d.
MVN Rd, <operand2>	Perform a bitwise logical NOT operation on the value specified by <operand2> and store the result in register d.
LSL Rd, Rn, <operand2>	Logically shift left the value stored in register n by the number of bits specified by <operand2> and store the result in register d.
LSR Rd, Rn, <operand2>	Logically shift right the value stored in register n by the number of bits specified by <operand2> and store the result in register d.
HALT	Stops the execution of the program.

**Labels:** A label is placed in the code by writing an identifier followed by a colon (:). To refer to a label the identifier of the label is placed after the branch instruction.

#### Interpretation of <operand2>

<operand2> can be interpreted in two different ways, depending on whether the first character is a # or an R:

1. # – use the decimal value specified after the #, eg #25 means use the decimal value 25
2. Rm – use the value stored in register m, eg R6 means use the value stored in register 6

The available general purpose registers that the programmer can use are numbered 0–12







**0 9 . 1** RFID tags can be read by an RFID reader.

Describe how data is read from an RFID tag.

**[3 marks]**

---

---

---

---

---

---

**0 9 . 2** An RFID tag can be active or passive. A passive tag must be moved within a few centimetres of an RFID reader to be read. An active tag will have its own power source, which allows it to be read from a greater distance.

It is decided that RFID tags will be used in passports to store personal information.

Explain why passive tags are likely to be a more appropriate choice than active tags for use in passports.

**[2 marks]**

---

---

---

---

---

---

**5**



**Turn over for the next question**

*Do not write  
outside the  
box*

**DO NOT WRITE ON THIS PAGE  
ANSWER IN THE SPACES PROVIDED**

**Turn over ►**







1	1	.	1
---	---	---	---

Describe the difference between baud rate and bit rate.

[2 marks]

---

---

---

---

---

---

1	1	.	2
---	---	---	---

A photographer wants to create a large file sharing network to allow thousands of photographers to share their photos with each other for free.

State **two** reasons why the photographer may choose to use a peer-to-peer network rather than a client-server network.

[2 marks]

---

---

---

---

---

---

1	1	.	3
---	---	---	---

Explain the purpose of a Service Set Identifier (SSID).

[1 mark]

---

---

---



Do not write  
outside the  
box

1 1 . 4

Explain how disabling SSID broadcasting can increase the security of a wireless network.

[2 marks]

---

---

---

---

---

---

---

7

END OF QUESTIONS



**There are no questions printed on this page**

*Do not write  
outside the  
box*

**DO NOT WRITE ON THIS PAGE  
ANSWER IN THE SPACES PROVIDED**







Do not write  
outside the  
box

[illegible]

Do not write  
outside the  
box

[illegible]

**There are no questions printed on this page**

*Do not write  
outside the  
box*

**DO NOT WRITE ON THIS PAGE  
ANSWER IN THE SPACES PROVIDED**

**Copyright information**

For confidentiality purposes, all acknowledgements of third-party copyright material are published in a separate booklet. This booklet is published after each live examination series and is available for free download from [www.aqa.org.uk](http://www.aqa.org.uk).

Permission to reproduce all copyright material has been applied for. In some cases, efforts to contact copyright-holders may have been unsuccessful and AQA will be happy to rectify any omissions of acknowledgements. If you have any queries please contact the Copyright Team.

Copyright © 2024 AQA and its licensors. All rights reserved.



2 8



2 4 6 A 7 5 1 6 / 2

IB/G/Jun24/7516/2